

PROCEDURAL

3EP18

First name _____

Last name _____

School _____

Class _____

Date of birth ○○ ○○ ○○○○

Date of test ○○ 05 2018

Total score (maximum 30)



1 Count **on** in fours.

25 → 29 → 33 → →

Count **back** in threes.

77 → 74 → 71 → →

2 Gwen has these coins.



How much money does Gwen have?

p

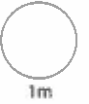
She spends 23p.

How much money does she have now?

p

3

$9 \times 5 =$



4

This is how children in Class 3 go to school.

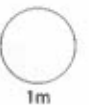
	girls	boys
car	 	
walk		
bus	 	
cycle		

3 girls and 6 boys walk.

Show this on the tally chart.

More girls than boys go by **bus**.


How many more?



TOTAL


5

Half of £6.40 = £



6

6 eggs in 1 box



How many eggs in 10 boxes?

 eggs

7

Write 167, 19 and 148 in the empty boxes.

167 - 19 = 148

so + =



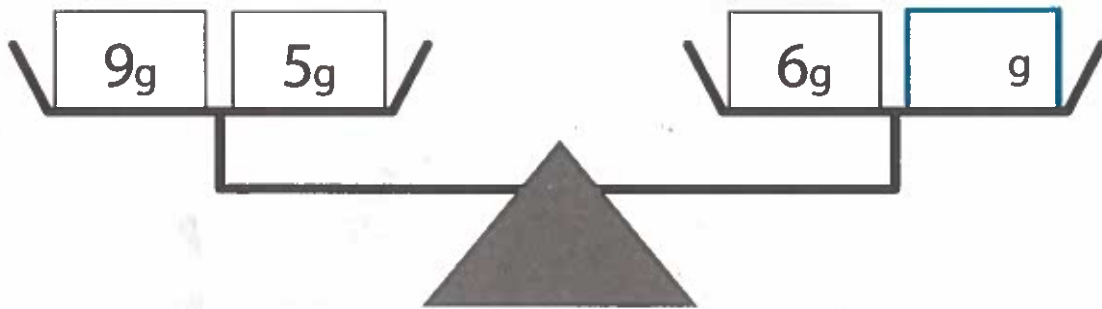
8

Double 16 =

1m

9

Write the weight needed to balance the scales.



1m

10

Write the number that is **one less** than a **thousand**.

1m

TOTAL

6m

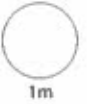
11



Look at the clock.

How many minutes until 5 o'clock?

minutes



12



1 cake
30p



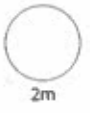
1 biscuit
5p

Jan spends £2 on cakes and biscuits.

He buys 6 cakes.


How many biscuits does he buy?

biscuits



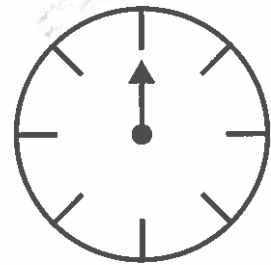
13

$$40p + \text{£}1.50 + \boxed{} = \text{£}2$$



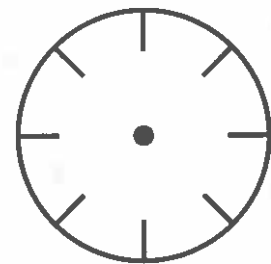
14

This is a dial.



The arrow turns a **quarter** turn **clockwise**.

Show on the dial where the arrow is pointing now.



15

What is the **area** of this shape?



Circle the correct answer.

12cm²

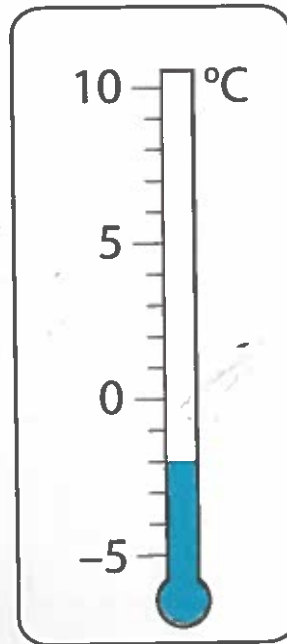
5cm²

10cm²

14cm²



16 What is this temperature?

 °C

17 Write how many quarters are in 1



18



Choose some of these symbols to complete the number sentence.

14 ○ 6 = 4 ○ 2



19 Brad has 16 pencils.

$\frac{1}{4}$ of them are red.

How many pencils are red?

pencils



There are 30 balls in a bag.

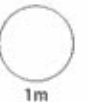
$\frac{1}{3}$ of them are black.

How many balls are black?

balls



20 The **difference** between 67 and 59 is



TOTAL



21

$$5 \times 8 = 4 \times \boxed{}$$



22

Morning bus timetable

Wood Lane	9:28	9:58	10:28	10:58
High Street	9:46	10:16	10:46	11:16
Post Office	9:55	10:25	10:55	11:25
Station	10:05	10:35	11:05	11:35

Mrs Lewis must be at the **station** at **11:05**

What time is the latest bus she can get from **Wood Lane**?





23 Write in order.

$\frac{1}{2}$

$1\frac{3}{4}$

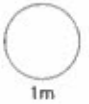
$1\frac{1}{4}$

1



smallest

largest



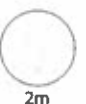
24 This hat costs £7.50

Ruth saves £1.50 a week to buy the hat.



For how many weeks does she save?

weeks



TOTAL

